




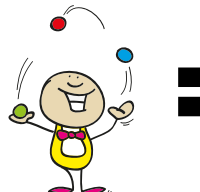




Enigma Circense (Nível Fácil)




Consegues resolver este enigma circense?

Nível Fácil

A  +  +  = 60

B  +  +  = 30

C  -  = 3




D  +  +  = ?

Solução: cada acrobata aérea vale 20 | cada mágico vale 5 | cada palhaço vale 1 | cada clown vale 25



Enigma Circense (Nível Médio)



Consegues resolver este enigma circense?

Nível Médio


A  +  +  = 22

B  +  + 4 = 10

C  +  = 8

D  +  = 14

Qual o valor do Acrobata Aéreo?

 = ?

Solução: cada mágico vale 7 | cada palhaço vale 5 | cada clown vale 25